

# Statistic Midterm

*Spring 2018*

This is a closed-book, closed-notes exam. You may use any calculator.

Please answer all problems in the space provided on the exam.

Read each question carefully and clearly present your answers.

**Honor Code Pledge:** “I pledge my honor that I have not violated the University Honor Code during this examination.”

**Signed:** \_\_\_\_\_

**Name:** \_\_\_\_\_

Here are some useful formulas:

- $E(aX + bY) = aE(X) + bE(Y)$
- $Var(aX + bY) = a^2Var(X) + b^2Var(Y) + 2ab \times Cov(X, Y)$
- The standard error of  $\bar{X}$  is defined as  $s_{\bar{X}} = \sqrt{\frac{s_X^2}{n}}$  where  $s_X^2$  denotes the sample variance of  $X$ .
- The standard error for the difference in the averages between groups a and b is defined as:

$$s_{(\bar{X}_a - \bar{X}_b)} = \sqrt{\frac{s_a^2}{n_a} + \frac{s_b^2}{n_b}}$$

where  $s_a^2$  denotes the sample variance of group  $a$  and  $n_a$  the number of observations in group  $a$ .

- The standard error for a proportion is defined by:  $s_{\hat{p}} = \sqrt{\frac{\hat{p}(1-\hat{p})}{n}}$



## Problem 2 (10 points each)

The breathalyzers carried by cops have a false positive rate of 5%. However, they are perfect at detecting drunk drivers, i.e., the false negative probability is zero. Previous studies have concluded that on a Saturday night in Chicago, 1 in 500 drivers are drunk. Mayor Emmanuel decided to implement a policy of no-refusal, random traffic stops on Saturday's. That means that random cars will be pulled over and their drivers tested.

1. On your way home on a Saturday night, your Uber driver gets randomly stopped. She tests positive for being drunk. Given this information, what is the probability she is drunk?

2. Based on the numbers provided and your computation in question (1), do you agree or disagree with the Mayor's decision? Why or why not?

### Problem 3 (5 points each)

A construction company needs to complete a project within 11 weeks, or they will incur significant cost overruns, including penalties due to the client. The manager of the company has assessed that the project will take between 10 and 14 weeks to complete. The manager has also estimated the probability of each possible outcome:

Weeks to complete	Probability
10	0.075
11	0.65
12	0.2
13	0.05
14	0.025

1. What is the probability of completing the project on time?
2. What is the expected value of the time to complete the project?
3. The company must pay a penalty of \$5,000 for **every additional week (past 11 weeks) that they work**, plus a additional \$50,000 penalty if the work takes 14 weeks to complete. What is the expected value of the penalty incurred?
4. Suppose you're the engineer in charge of bidding for the projects in this company (i.e. estimating the total cost of the job, plus overhead, potential overrun costs and profit). How would you use the information from the previous question to price this job?

### Problem 4 (10 points each)

I am trying to build a portfolio composed of SP500 and Bonds.

Assume  $SP500 \sim N(11, 19^2)$  and  $Bonds \sim N(4, 6^2)$ . In addition, the covariance between SP500 and Bonds is -22.6.

1. Which portfolio is better: a 50-50 split between the two assets or a 60-40 split between SP500 and Bonds? Justify your criteria for comparison.

2. Which of the two portfolios considered in item (1) has the largest probability of delivering a negative return?

## Problem 5

I am trying to get into the insurance business. As a starter, I am going to sell the 2019 Booth MBA class an unemployment insurance policy that will pay a student \$100k if they don't get a job by the end of the program (by graduation time). From years and years of observing this program, I figured that the probability that a student does not get a job by the end of program is 0.5%. Based on this number I decided to sell each policy for \$850.

1. From the perspective of my insurance business, is that a good price? Justify your answer. (5 points)

2. It turns out that I was able to sell this policy to 1,000 students in the 2019 class! What is my expected profit at graduation time? (5 points)

3. The standard deviation for the payout of one policy is approximately \$7k. What is the probability (approximately) that I will lose money by graduation time? (hint: use the normal approximation... ). (10 points)





## Problem 7 (20 points)

Your cognitive capacity is significantly reduced when your smartphone is within reach, even if it's off. That's the claim from a new study from the McCombs School of Business at The University of Texas at Austin.

Marketing Assistant Professor Adrian Ward conducted experiments with nearly 600 smartphone users in an attempt to measure, for the first time, how well people can complete tasks when they have their smartphones nearby even when they're not using them.

In one experiment, the researchers asked study participants to sit at a computer and perform a task that required full concentration in order to succeed. The tests were geared to measure participants' available cognitive capacity – that is, the brain's ability to hold and process data at any given time. Before beginning, participants were randomly instructed to place their smartphones either on the desk face down (group 1; 200 participants), in their pockets (group 2; 200 participants), or in another room (group 3; 200 participants). All participants were instructed to turn their phones to silent.

**The researchers found that participants with their phones in another room significantly outperformed those with their phones on the desk, and they also slightly outperformed those participants who had kept their phones in the pocket.**

Based on the results from the experiment (listed below), do you agree with the statement from the above (bold) paragraph? Justify your answer.

	group 1	group 2	group 3
Successful tasks	90	130	150

### Problem 8 (3 points each)

Assume the model:  $Y = 5 - 2X + \varepsilon$ ,  $\varepsilon \sim N(0, 9^2)$

1. What is expected value of  $Y$  if  $X = 1$ , i.e,  $E[Y|X = 1]$  ?

- (a) 5
- (b) 3
- (c) 4
- (d) 6

2. What is the  $Var[Y|X = 0]$ ?

- (a) 9
- (b) 81
- (c) 3
- (d) 6

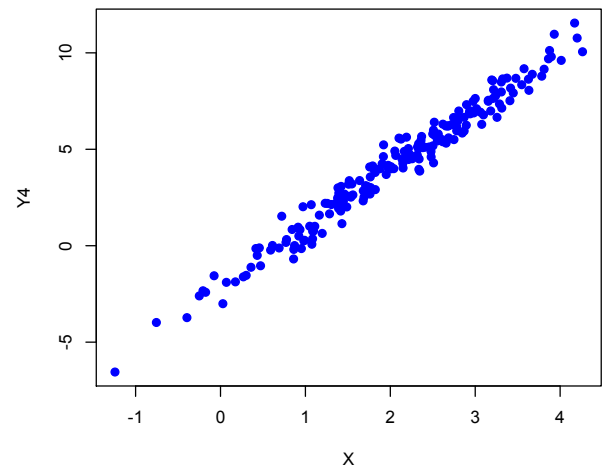
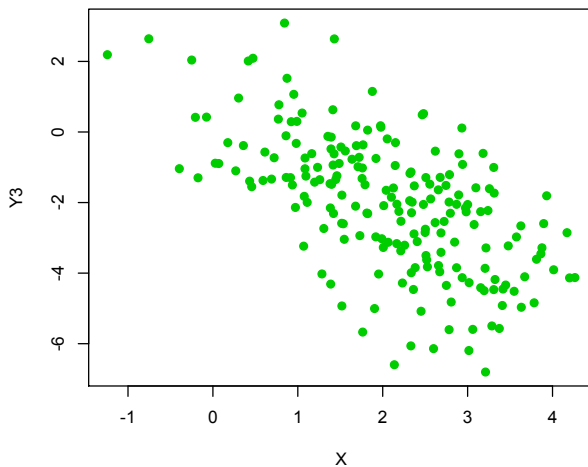
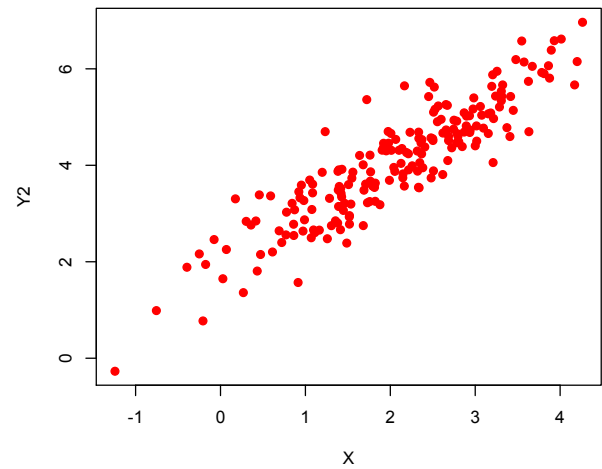
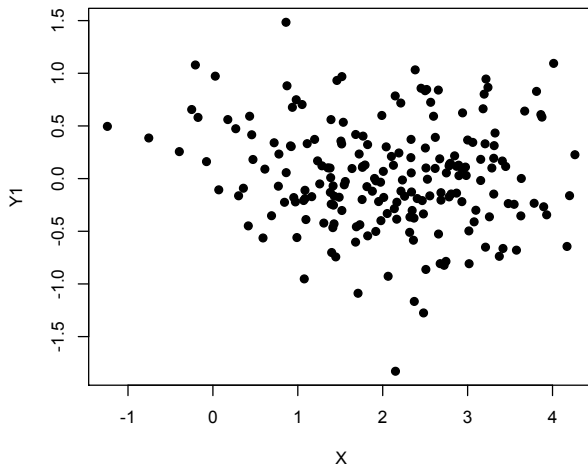
3. What is the  $Pr(Y > 10)$ , given  $X = 2$ ?

- (a) 13%
- (b) 68%
- (c) 16%
- (d) 2.5%

4. What is the  $Pr(-6 < Y < 21)$ , given  $X = 1$ ?

- (a) 5%
- (b) 16%
- (c) 81.5%
- (d) 34%

### Problem 9 (5 points each)



In the above scatterplots, four different variables  $Y1$ ,  $Y2$ ,  $Y3$  and  $Y4$  were regressed onto the same  $X$  (in all four scatterplot we have the exact same  $n = 200$  values for  $X$ ). Carefully examine the plots and answer the questions below:

1. The estimates of the slope ( $b_1$ ) for the four regressions are listed below. Which one belongs to the regression of  $Y3$  onto  $X$ ?
  - (a) -0.054
  - (b) 3.020
  - (c) 1.031
  - (d) -1.094

2. The estimates of the slope ( $b_1$ ) for the four regressions are listed below. Which one belongs to the regression of  $Y_1$  into  $X$ ?
- (a) -0.054
  - (b) 3.020
  - (c) 1.031
  - (d) -1.094
3. The estimates of the intercept ( $b_0$ ) for the four regressions are listed below. Which one belongs to the regression of  $Y_4$  into  $X$ ?
- (a) -2.044
  - (b) 0.212
  - (c) 0.135
  - (d) 1.951
4. The standard errors of the regressions ( $s$ ) are listed below. Which one belongs to  $Y_3$ ?
- (a) 0.52
  - (b) 0.49
  - (c) 1.51
  - (d) 0.51
5. The  $R^2$  of the regressions are listed below. Which one belongs to  $Y_2$ ?
- (a) 37%
  - (b) 81%
  - (c) 97 %
  - (d) 1 %

6. What is the correlation between  $Y_1$  and  $X$ ?
- (a) -0.12
  - (b) 0.91
  - (c) 0.97
  - (d) -0.60
7. Using all the information provided so far, give a rough approximation of the 95% prediction interval for  $Y_4$  when  $X = 3$ .
8. Give an approximation for  $Pr(Y_3 > 0|X = 2)$

## Problem 10 (5 points each)

In trying to understand how good of an investor Warren Buffet is, I collected data on the annual returns (in percentage terms) of his entire portfolio and decided to compare it to the market (again, in percentage terms). In doing so I ran the following regression:

$$WB = \alpha + \beta Market + \epsilon \quad \epsilon \sim N(0, \sigma^2)$$

where  $WB$  refers to the annual returns on Buffet's portfolio and  $Market$  refers to the annual returns on the U.S. stock market. The result of this regression is in the table below:

<i>Regression Statistics</i>	
Multiple R	0.628697
R Square	0.39526
Adjusted R	0.382113
Standard E	11.4114
Observatio	48

ANOVA					
	<i>df</i>	<i>SS</i>	<i>MS</i>	<i>F</i>	<i>ignificance F</i>
Regression	1	3915.157401	3915.157	30.06571	1.71E-06
Residual	46	5990.121766	130.22		
Total	47	9905.279167			

	<i>Coefficients</i>	<i>Standard Error</i>	<i>t Stat</i>	<i>P-value</i>	<i>Lower 95%</i>	<i>Upper 95%</i>
Intercept	14.94673					
Market	0.524621					

1. What is the expected value for the returns on Buffet's portfolio when the market is up 10%?

